

Zoo Coordinates

12
11
10
9
8
7
6
5
4
3
2
1
0









0 1 2 3 4 5 6 7 8 9 10 11






Which animal is at these coordinates on the zoo map?

(11,11) = Toucan (2,6) = Tiger
 (6,8) = Hippo (3,10) = Flamingo
 (11,3) = Cowala (1,1) = Panda

Write the coordinates of these animals on the zoo map:

 = 1,11  = 6,4
 = 3,3  = 10,6
 = 10,9  = 8,7

Draw your own zoo animals at these coordinates on the map:

(6,1)  (2,9)  (7,3) 
 (8,3)  (8,6)  (11,1) 