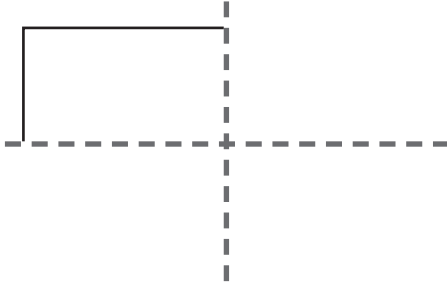


# Completing a symmetric shape

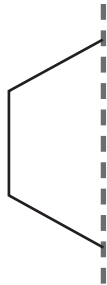
I Complete the symmetric shapes. Name each shape once you have drawn it.

a)



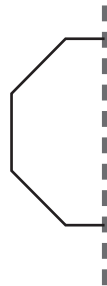
Name of shape: Rectangle

b)



Name of shape: Hexagon

c)



Name of shape: Octagon

d)



Name of shape: Triangle